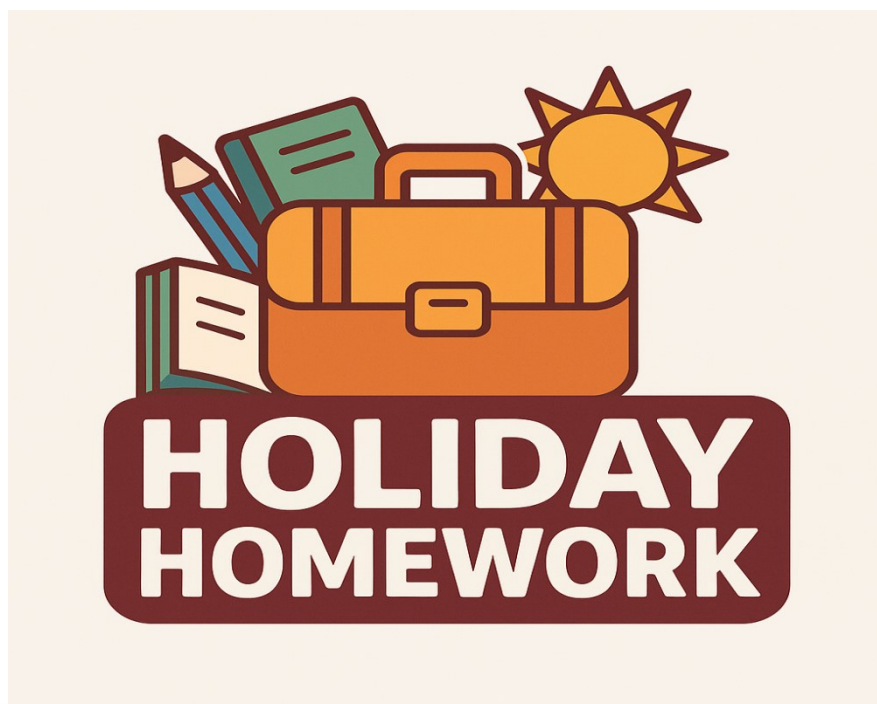




# **DEEPIKA PUBLIC SCHOOL**

## **MANESAR**

**SESSION:- 2025-26**



**CLASS:- 6<sup>th</sup>**

**Dear Students**

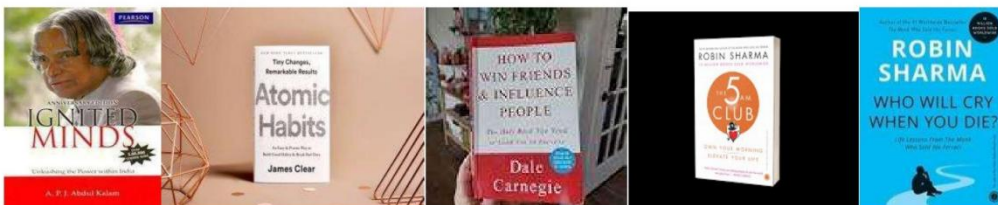
Summer vacations are synonymous with fun, frolic, getting up late in the morning, going for picnics, spending time with friends, exploring new places, and watching fun filled shows on television.



But there is lot more you can do to make your vacations more meaningful, interesting, and fun while still doing your favourite activities.

Here are some suggestions you may like:

- Go out for morning walk and spend time to observe nature.
- Watch your mom working in the kitchen and help her keep the house clean.
- Visit your grandparents, spend time with them.
- Teach them to operate some useful applications in mobile phones.
- Plant a sapling and watch it grow.
- Play any sport with your parents which they played during their school days.
- Devote some time for reading during the summer break. Some suggested books:



Summer vacation is the time when you can be more candid and creative. The Holiday assignments are focused to let the creative and latent talents, skills and desires of the children come to the surface in a joyful and experiential manner. So dear children, Get... Set... Go... Enjoy doing the activities and ensure timely completion of the given assignments.

## English

### COMPREHENSION

➤ Read the following passage and answer the questions that follow .

1. Kerala is a warm, moist land where harvests are usually good. Coconut, tapolca and rice are its main Onam is one of Kerala's main festivals. It celebrates the harvest time at the end of the monsoon The story behind the festival goes back to the legendary kingdom of Mahabali. People sing prave Mahabali. They say, 'All men were equal in his reign. There was no evil, hate or crime. People of Kerala that once a year, at the time of Onam, the spirit of King Mahabali visits his reign. They want Mahabali that his people are still living well. So, people clean their houses and polish every brass pot and Some children go out early morning to gather flowers like marigolds, lilies and other blossoms. A canop built in the cleanly swept front courtyards of homes. There in the shade, families lay a carpet of all fresh flowers. Neighbours go from house to house to admire these sweet-smelling carpets. Parents usually the clothes of golden yellow colour, the colour of the harvest. Families go to temple to make special offerings of thanks.

#### Exercise

A. Complete the following sentences on the basis of your reading of the passage.

1. Kerala is a fertile land where \_\_\_\_\_.
2. Onam is an important festival of Kerala as \_\_\_\_\_.
3. People of Kerala welcome King Mahabali by \_\_\_\_\_.
4. Flowers are used to \_\_\_\_\_.
5. The clothes worn on Onam are usually golden in colour because \_\_\_\_\_.
6. People from neighbourhood go from house to \_\_\_\_\_.

B. Find words from the passage which mean the same as the following.



1. generally \_\_\_\_\_

2. designs \_\_\_\_\_

3. important \_\_\_\_\_

4. collect \_\_\_\_\_

2. There ruled a king in Santiago who had amassed momentous wealth and built a great empire. He was extremely rich and had a lovely wife and obedient children. He thought, I own everything but not happiness. I must seek some wise people's counsel to know the ways and means to be happy. Soon a man of grey hair and great repute visited him and told him to behold the beautiful moon and the twinkling stars. He also advised him to keep close to Nature. "What a waste of time and energy!" said the king. Another wiser counsellor was invited and he said, "Music is the spice of life. Employ musicians in your court and their music will delight you. But neither of the wise counsellors could convince the king. Then appeared an untidy old man and declared that he could solve the king's problem. He said to the attendants, "Bring a happy man's shirt for the king. He will be happy if he wears a happy man's shirt. The king got impressed. The attendants went out in search of a happy man's shirt. They left no stone unturned but could not trace any happy man on the earth. Ultimately, one vizier saw someone lying on the sand and singing merrily. The vizier approached him and asked if he was happy. He answered in the affirmative. 'Then lend me your shirt for the king. I will give you diamonds unlimited, said the vizier. The man laughed his head off and then said, 'I would have gladly done so if my shirt had a back to it, it is all tattered. The vizier narrated the series of events to the king. The king learnt a lesson to live happily

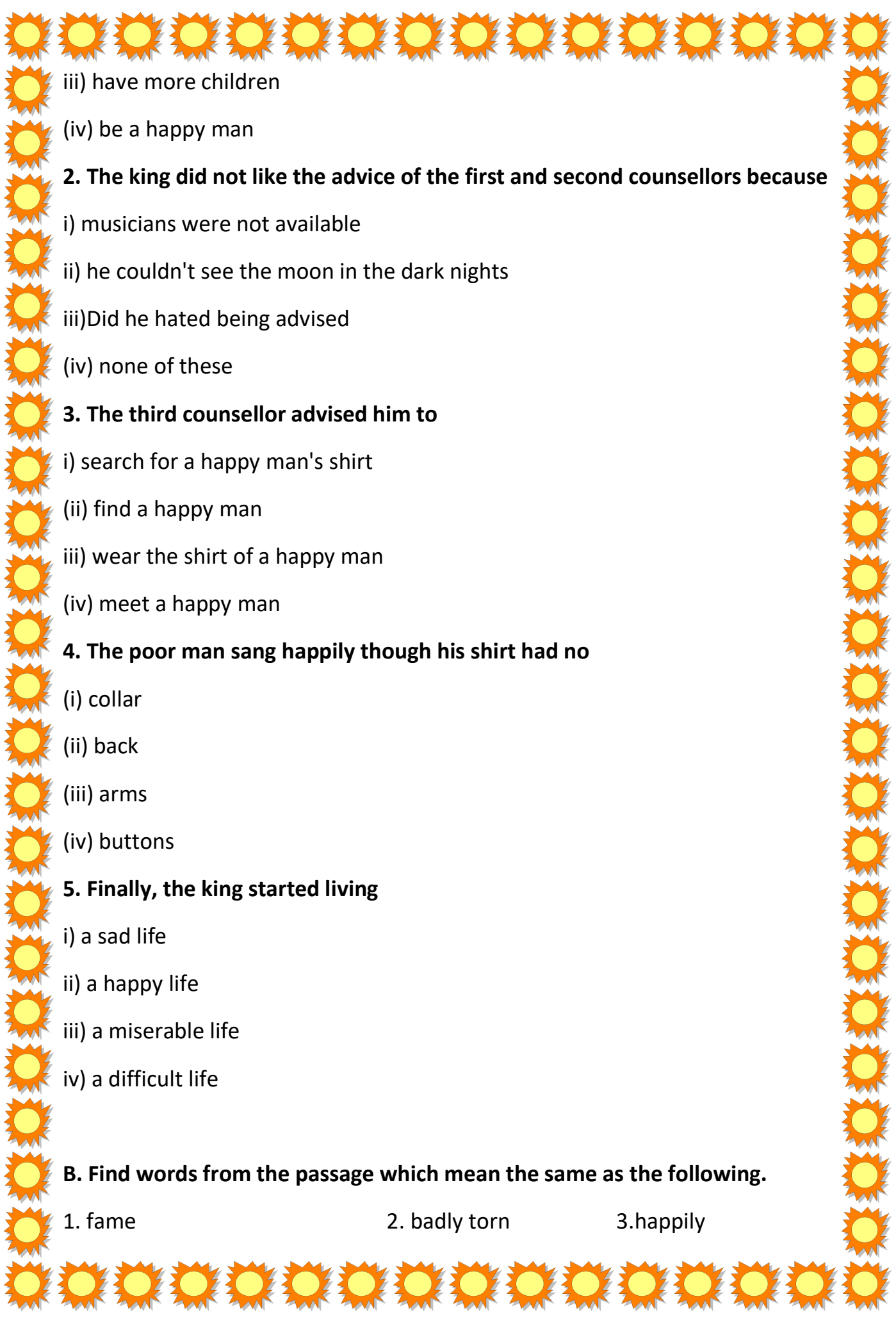
### Exercise

**A Tick( ) the most suitable option.**

**1. The king wanted to**

i) be richer

ii) wear a happy man's T-shirt



iii) have more children

(iv) be a happy man

**2. The king did not like the advice of the first and second counsellors because**

i) musicians were not available

ii) he couldn't see the moon in the dark nights

iii) Did he hated being advised

(iv) none of these

**3. The third counsellor advised him to**

i) search for a happy man's shirt

(ii) find a happy man

iii) wear the shirt of a happy man

(iv) meet a happy man

**4. The poor man sang happily though his shirt had no**

(i) collar

(ii) back

(iii) arms

(iv) buttons

**5. Finally, the king started living**

i) a sad life

ii) a happy life

iii) a miserable life

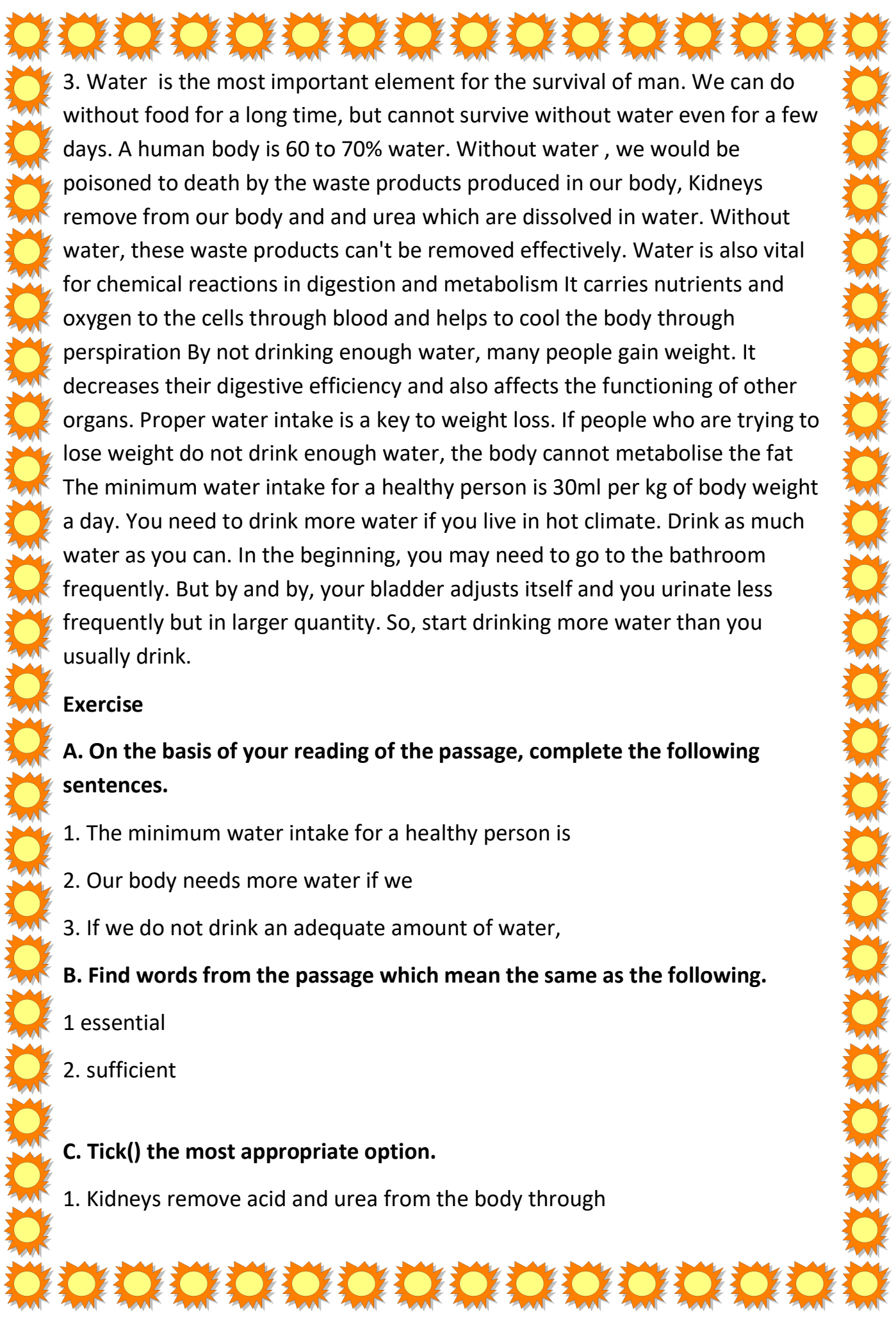
iv) a difficult life

**B. Find words from the passage which mean the same as the following.**

1. fame

2. badly torn

3. happily



3. Water is the most important element for the survival of man. We can do without food for a long time, but cannot survive without water even for a few days. A human body is 60 to 70% water. Without water, we would be poisoned to death by the waste products produced in our body, Kidneys remove from our body and urea which are dissolved in water. Without water, these waste products can't be removed effectively. Water is also vital for chemical reactions in digestion and metabolism It carries nutrients and oxygen to the cells through blood and helps to cool the body through perspiration By not drinking enough water, many people gain weight. It decreases their digestive efficiency and also affects the functioning of other organs. Proper water intake is a key to weight loss. If people who are trying to lose weight do not drink enough water, the body cannot metabolise the fat The minimum water intake for a healthy person is 30ml per kg of body weight a day. You need to drink more water if you live in hot climate. Drink as much water as you can. In the beginning, you may need to go to the bathroom frequently. But by and by, your bladder adjusts itself and you urinate less frequently but in larger quantity. So, start drinking more water than you usually drink.

### **Exercise**

**A. On the basis of your reading of the passage, complete the following sentences.**

1. The minimum water intake for a healthy person is
2. Our body needs more water if we
3. If we do not drink an adequate amount of water,

**B. Find words from the passage which mean the same as the following.**

- 1 essential
2. sufficient

**C. Tick() the most appropriate option.**

1. Kidneys remove acid and urea from the body through

(i) milk

(ii) blood

(iii) water

(iv) air

**2. The percentage of water in a human body is**

(i) 50-60

(ii) 80-90

(iii) 70-90

(iv) 60-70

**3. Which word in the passage means the opposite of 'gain'?**

(i) drink

(ii) remove

(iii) adjust

(iv) lose

### COMPOSITION

1. One day, while going to school very swiftly on your bicycle, you met with a small accident while trying to save a small child. You fell on the muddy road. You spoiled your clothes and you received some minor injuries.

Describe in about 60-80 words what you did then. Did the pedestrians help you in any way? You may take help from the words given in bold :

**[fear of being late**

**brakes did not work well**

**muddy road**

**slipped**

**tried to save a child**

**got injuries**

**washed up face**

**went to a nearby doctor**

**dressed**

**came back home]**

---

---

---

**2. Write a story on the basis of the outlines given below using the words given in the box.**

**[Thirsty      flew      peeped      trained      Brought      drank      pitcher]**

[It was a hot day. A crow\_\_\_\_\_He\_\_\_\_\_about in search\_\_\_\_\_.At last he saw a  
at a distance \_\_\_\_\_.He\_\_\_\_\_to it.He\_\_\_\_\_into the pitcher. He\_\_\_\_\_and stretched  
himself; but\_\_\_\_\_not reach the\_\_\_\_\_He\_\_\_\_\_some pebbles \_\_\_\_\_dropped  
them\_\_\_\_\_the pitcher\_\_\_\_\_came up. \_\_\_\_\_water to his fill.  
He thanked \_\_\_\_\_and flew away]

**3. Write a Paragraph on the following:**

**Benefits of keeping a dog/parrot as a pet**



## PICTURE COMPOSITION

Describe the following pictures in 30 to 40 words



1.

---

---

---

---

---

---

---

---

---

---

---

---

2.



---

---

---

Rearrange the jumbled words and make meaningful sentences.

1. Kaliya/notorious/was/dacoit/a

\_\_\_\_\_

2. Neighbouring/Ramdas/to a/swami/going was/village

\_\_\_\_\_

3. dacoit/was all/the/the/for/white beauty

\_\_\_\_\_

4. Wrapped/in a /dacoit /the /himself/tattered blanket

\_\_\_\_\_

5. Sat/the /road and/by /the/Dacoit/began to groan

\_\_\_\_\_

6. Swami Ji/pity/on/took/him/and/crying/he/why /asked/was

\_\_\_\_\_

7. Our/attention/first/to our/should be/health

\_\_\_\_\_

8. If we/we can/do not/a good/keep/health/not live/a good life

\_\_\_\_\_

9. We/to our/should/helpful/be/neighbours

10. Aurangzeb/a fanatic/was/but he was/guardian/a true/of his people


### ACTIVITY WORK

1. Roll no. 1 to 10  
- Make a chart on sentence and its type.
2. Roll no. 11 to 20  
- Make a chart on articles.
3. Roll no. 21 to 30  
- Make a chart on Noun - number.
4. Roll no. 31 to 40

Make a chart on Gender.

## हिंदी

प्रश्न 1) आइसक्रीम की तीलियों व रंगीन कागज़ों से एक सुंदर कठपुतली तैयार कीजिए तथा उसके पीछे ऐसे किन्हीं पाँच राज्यों के नाम लिखिए, जहाँ कठपुतलियों का नृत्य या खेल प्रसिद्ध हो। (उदाहरण हेतु कुछ नमूने नीचे चित्र में दिए गए हैं)





प्रश्न 2) ए-3 आकार की शीट पर 'खानपान की बदलती तस्वीर' विषय पर एक नारे सहित सुंदर पोस्टर तैयार कीजिए।

प्रश्न 3) व्याकरण की कार्य पत्रिका का प्रिंट निकालकर उस पर सभी उत्तर लिखिए।

### कार्यपत्रिका

प्रश्न 1) निम्नलिखित भाषाओं की लिपियाँ लिखिए: -

क) अंग्रेजी -

ख) संस्कृत

ग) गुजराती

घ) मराठी

ड.) पंजाबी

च) उर्दू

छ) उड़िया

छ) जर्मन

प्रश्न 2) निम्नलिखित वाक्यों में उचित विराम चिह्न लगाइए: -



क) अरे मीना अब बैठ जाओ कितनी देर खड़ी रहोगी

ख) माँ ने कहा छुट्टी होते ही सीधे घर आ जाना

ग) रवींद्रनाथ टैगोर को गुरुदेव के नाम से भी जाना जाता है

घ) नरेश ने क्रोधित होकर गुस्से में मोहन को आवाज़ दी

ड.) सूर्य उदय हुआ रात का अँधेरा मिट गया चिड़ियाँ चहचहाने लगीं

च) वह हँसते हँसते लोटपोट हो गया

छ) राघव रीना रवीना और रूपा सभी घूमने गए थे

ज) भ्रष्टाचार एक भयावह रोग

झ) सब बच्चे बगीचे में खेल रहे हैं

प्रश्न 3) वाक्यों को शुद्ध करके पुनः लिखिए।

क) दाल में कौन गिर गया?

ब) रमेश ने ग्रहकार्य कर लिया।

ग) अशोक बेफिजूल की बातें करता है।

घ) बच्चे के पेट में दर्द हो रही है।

ड.) प्रत्येक बच्चे बैठ जाएँ।

च) मनीषा ने अच्छे कपड़े धोए।

छ) बालक छत पर से गिर गया।

छ) मीरा को काटकर सेब खिलाइए।

प्रश्न 4. हिंदी व्याकरण पेज नंबर 127 पर प्रश्न- 3 और 128 पर प्रश्न -4

पुस्तक में करो।

प्रश्न 5.कार्यपत्रक 2,20,24,25,31 हिंदी व्याकरण पुस्तक में करो।

## Mathematics

### Activity based question

1- Prepare project based on numbers (Roll no. 1 to 17)- natural and whole numbers

2- Prepare a project based on measurement unit (Roll No. 18 to last)

Kilometer , kilo litre, kilogram etc

Following points in mind:

- Title page (Topic of the project)
- Cover Page(essence of the project)
- Table of Content(Index)
- Introduction of the topic
- Terminology and symbol used
- Explanation of the topic
- Real life Application(Use Picture)

### Work sheet

1. The number of sheets of paper available for making notebooks is 75,000. Each sheet makes 8 pages of a notebook. Each notebook contains 200 pages. How many notebooks can be made from the paper available?

- a) 4500                      b) 3000  
c) 3500                      d) 4000

2. Use the given digits without repetition and make the greatest and smallest 4-digit numbers. 9, 7, 4, 1

a) 7,452,283.      b) 7,45,22,83

c) 74,52,2831.      d) None of these

**3. Insert commas suitably and write the names according to International System of Numeration: 7452283**

a) 7,452,283.      b) 7,45,22,83

c) 74,52,283.      d) None of these

**4. Write the numeral for the number Nine crore five lakh forty-one.**

a) 90500410.      b) None of these

c) 95000041.      d) 90500041

**5. Use the given digits without repetition and make the greatest and smallest 4-digit numbers. 2, 8, 7, 4**

a) 7824, 4287.      b) 2874, 4782

c) 8742, 2478.      d) 8472, 2748

**6 The smallest 8 digit number is called**

a) ten lakh.      b) one lakh

c) one crore.      d) ten crore

**7. The sum of the number 765432 and the number obtained by reversing its digit is**

a) 9999.      b) 999999.      (c) 999.      (d) 99999

**8. Fill in the blanks:**

1 centimetre = \_\_\_\_\_ millimetre

2. The distance between Srinagar and Leh is 422km. The same distance in meters is \_\_\_\_\_m.

3. crore is equal to \_\_\_\_\_ million.

**9. State true or false:**

a) 1 Lakh = 100 thousand.

b) 1 Thousand = 10 hundred

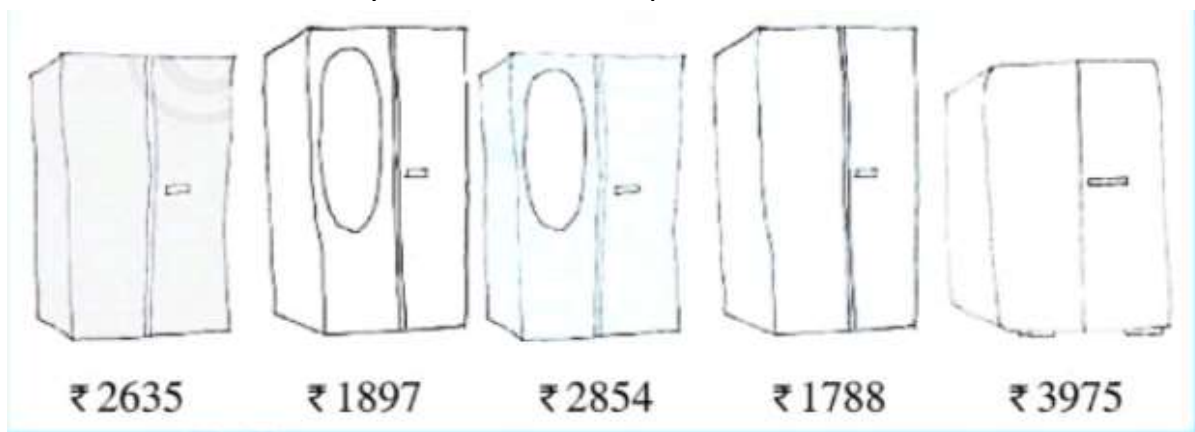
c) Among kilo, milli, and centi, the smallest is centi.

### BASIC PROBLEMS

1. Find the difference between the greatest and the least 5-digit number that can be written using the digits 6, 2, 7, 4, 3 each only once.
2. A garment factory produced 216315 shirts, 182736 trousers, and 58704 jackets in a year. What is the total production of all the three items in that year?
3. A book exhibition was held for four days in a school. The number of tickets sold at the counter on the first, second, third and final days was respectively 1094, 1812, 2050 and 2751. Find the total number of tickets sold on all the four days.
4. In an election, the successful candidate registered 5,77,500 votes and his nearest rival secured 3,48,700 votes. By what margin did the successful candidate win the election?
5. A bus takes hours to complete its journey from khandwa to Indore. If the distance between Khandwa to Indore is 290 km then calculate the speed of bus.

### Real life based situation

- 1 Read the text carefully and answer the questions:



Sohan and Rita went to buy an almirah. There were many almirahs available with their price tags.

(i) The lowest cost of almirah is ₹ \_\_\_\_\_.

- a) None of these.      b) ₹ 2854  
c) ₹ 1897.              d) ₹ 1788

**(ii). Arrange prices of almirahs in increasing order.**

- a) ₹ 1788, ₹ 1897, ₹ 2635, ₹ 2854, ₹ 3975
- b) ₹ 2635, ₹ 1897, ₹ 2854, ₹ 1788, ₹ 3975
- c) ₹ 2635, ₹ 1897, ₹ 2854, ₹ 1788, ₹ 3975
- d) ₹ 2635, ₹ 1897, ₹ 2854, ₹ 1788, ₹ 3975

**(iii) Arrange prices of almirahs in decreasing order**

- a) ₹ 3975, ₹ 2854, ₹ 2635, ₹ 1897, ₹ 1788
- b) ₹ 2635, ₹ 1897, ₹ 2854, ₹ 1788, ₹ 3975
- c) ₹ 2635, ₹ 1897, ₹ 2854, ₹ 1788, ₹ 3975
- d) ₹ 1788, ₹ 1897, ₹ 2635, ₹ 2854, ₹ 3975

**(iv) ₹ 2187 is the difference between highest and lowest price.**

- a) True.
- b) False

## **SCIENCE**

**Q1. Imagine that you undertook a journey to Telangana and you have unforgettable memories of the place. Design a brochure highlighting famous cuisines, flora and fauna, wildlife, knowledge of plants used for traditional medicines, climate and government measures to preserve the beauty of Telangana on A3 size pastel sheet or in a booklet form.**

**Q2. Prepare the following projects according to your roll no.**

**Roll No. 1 to 20 - Make 3D of different habitats such as deserts, forest, mountains, ocean etc. Use craft supplies available to you . Also use 3D figurines of organisms adapted to specific habitats for the specific models.**

**Roll no. 20 onwards - Research about a food item of your choice, including its history, production, and cultural significance. Create a digital story or presentation using MS PowerPoint.**

**OR**

**Make a 3D model of a food pyramid.**

**Q3. Do Page No. 47, Think and Answer, Observe and Answer and Read and Answer in fair notebook.**



## **S.St**

**1. Collect the following information from the given states. Also paste pictures to supplement the information such as Capital, Language, Traditional Dress, Main Food, Festivals, Main Crops, Monuments, Tourist Spots, and Industries**

**i) Maharashtra**

**ii) Jammu and Kashmir**

**iii) Tamil Nadu**

**iv) West Bengal**

**v) Arunachal Pradesh**

**2. How well do you know your country? Name the following and draw pictures. Also,**

**Write a few lines on each of them.**

**i) National Flag**

**ii) National Emblem**

**iii) National Animal**

**iv) National Bird.**

**v) National Anthem**

**vi) National Game**

**vii) National Flower**

**viii) National Fruit.**

**ix) National Currency**

### 3. Project work



**Sustainable Development Goals:** The Sustainable Development Goals are the blueprint to achieve a better and more sustainable future for all. They address the global challenges we face, including those related to poverty, inequality, climate change, environmental degradation, peace and justice. The 17 Goals are all interconnected, and in order to leave no one behind, it is important that we achieve them all by 2030.

**ACTIVITY-**Keeping in mind the above information, design an attractive, eye catching and informative poster on **any one** goal of Sustainable Development Goal on an A4 size sheet.

**Reference Images:**

