



# DEEPIKA PUBLIC SCHOOL



2026-27



## Holiday Homework

----- CLASS 3<sup>rd</sup> -----





Let's have fun, our holidays have begun

"Month of May has brought long, hot days,



And now we have our summer holidays.

Summer holidays mean no to school,

Waking up late with no set rules.



Little homework, easy to be done, Lesser  
studies and lots of fun.



Playing and talking and watching cartoons,

Fun continues till the end of June.



Beautiful time comes once in a year,



Summer holidays are best days ever."



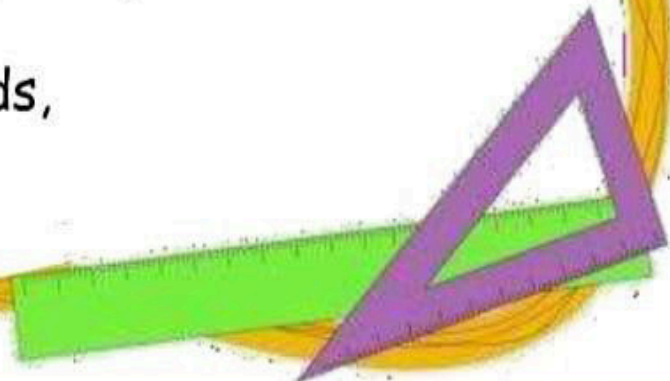



Dear Parents,

- Summer Vacation is at our doorstep. Holidays are an opportunity to relax and unwind by indulging in activities that are enjoyable and at the same time educative.
- We have designed few activities for kids to fire their imagination, to make them explore, discover and reinvent many things.

Warm Regards,

DPS



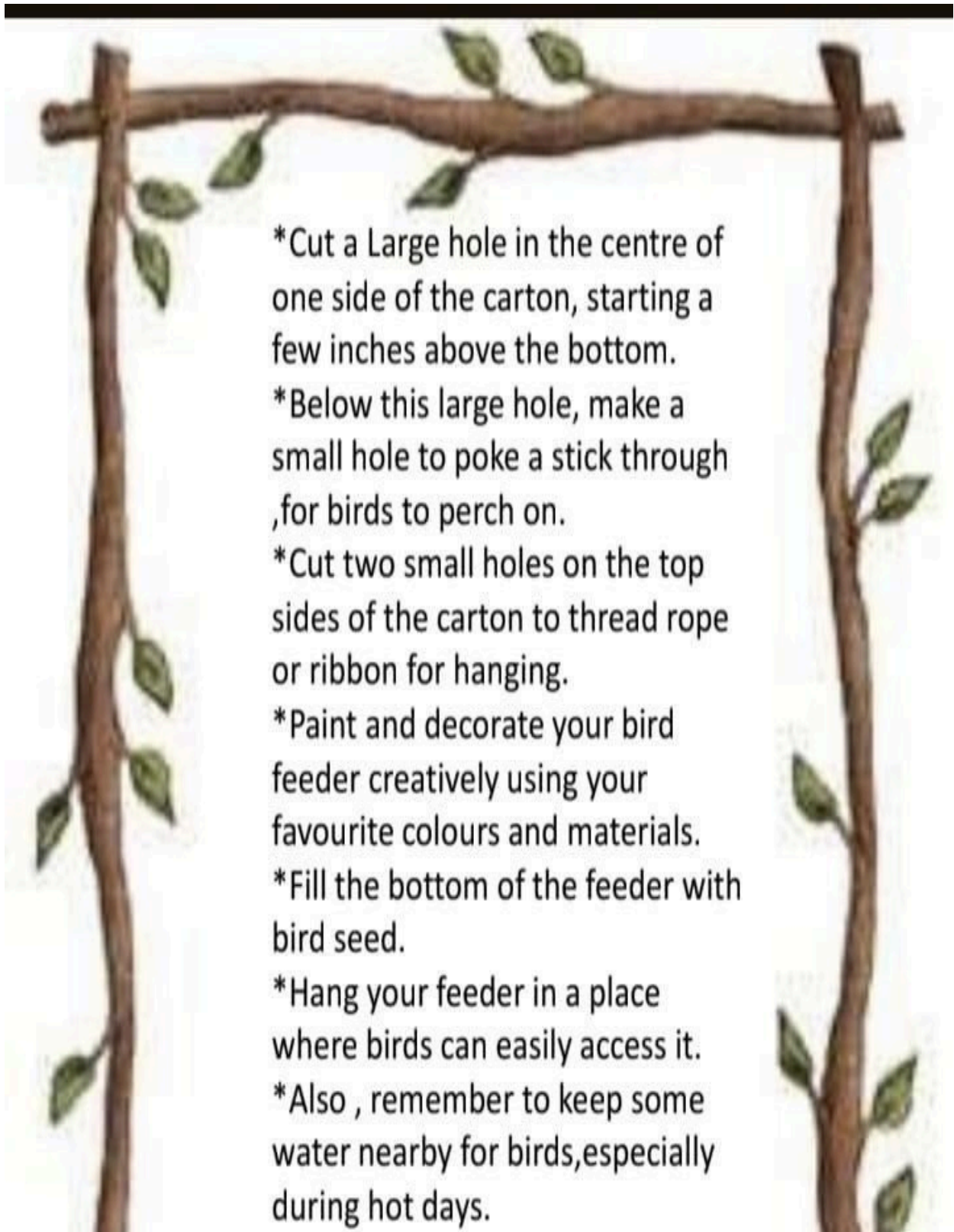
---

# BIRD FEEDER ACTIVITY

## MATERIALS NEEDED

- \*1 empty milk or juice carton
- \*Rope, ribbon or wire
- \*Poster colours and paint brushes
- \*Glue (Fevicol), scissors
- Decorations (recycled household items— buttons, paper, etc.)
- \*Stick(for perch)






- \*Cut a Large hole in the centre of one side of the carton, starting a few inches above the bottom.
- \*Below this large hole, make a small hole to poke a stick through ,for birds to perch on.
- \*Cut two small holes on the top sides of the carton to thread rope or ribbon for hanging.
- \*Paint and decorate your bird feeder creatively using your favourite colours and materials.
- \*Fill the bottom of the feeder with bird seed.
- \*Hang your feeder in a place where birds can easily access it.
- \*Also , remember to keep some water nearby for birds,especially during hot days.

<https://youtu.be/q6CFR9V2V3M?si=Mb0v6aymHd4pBOYJ>

<https://youtu.be/TckiFBjYHKU?si=UisJ4tyUa8vsTrru>



**Q 1. Read the short passage and answer the questions .**

### **At the circus**

I am George. I am at the circus with my friends. My father bought us 5 tickets for the circus yesterday. We saw 3 clowns and rabbits with fancy dresses. Then we saw a monkey doing stunts on the rope. We are all laughing and enjoying.

1) George went to the circus with

- a) parents                      b) aunt                      c) friends

2) How many tickets did George's father bring?

- a) 1                                  b) 5                                  c) 8

3) What did George see there?

- a) clowns                      b) lion                      c) girl

4) A monkey was doing stunts on the

- a) cycle                      b) road                      c) rope

**Q2: Rearrange the following questing words to make a sentence.**

1. /books/loves / brother / reading / his /

\_\_\_\_\_.

2. / the / found / treasure / they/map/using/a/

\_\_\_\_\_.

3. /a/new/bought / she / dress / beautiful /

\_\_\_\_\_.

4. /played / children / happily / the/in/park/ the /

\_\_\_\_\_.

5. / their / the / decorated / for / they / Christmas / tree /

\_\_\_\_\_.

**Q3. Complete the word-chain as instructed. Add four words each beginning with last letter of previous word:**

Complete the word-chain of nouns:

1. Rainbow → \_\_\_\_\_ → \_\_\_\_\_ → \_\_\_\_\_ → \_\_\_\_\_

2. Basket → \_\_\_\_\_ → \_\_\_\_\_ → \_\_\_\_\_ → \_\_\_\_\_

3. Suraj → \_\_\_\_\_ → \_\_\_\_\_ → \_\_\_\_\_ → \_\_\_\_\_

4. Delhi → \_\_\_\_\_ → \_\_\_\_\_ → \_\_\_\_\_ → \_\_\_\_\_

5. Tiger → \_\_\_\_\_ → \_\_\_\_\_ → \_\_\_\_\_ → \_\_\_\_\_

**Q4. Complete 10 Pages of English writing practice in a holiday homework notebook.**

**Q5. Write 10 lines about your father.**

**Q 6. Picture composition.**



**Q7. Complete the story with the help of clue box.**

### **SOUR GRAPES**

**(Clues:-hot, forest, thirsty, bunch, hanging, pluck, high, grapes, walked)**

One day, Bholu, the fox, was walking through the \_\_\_\_\_. He was \_\_\_\_\_ and hungry. Suddenly, he looked up and saw a \_\_\_\_\_ of juicy grapes from a tree. Bholu jumped up to \_\_\_\_\_ them, but he could not reach the bunch. He tried again and again. The grapes were too \_\_\_\_\_ for him. Bholu looked at them for the last time and said, "These grapes are \_\_\_\_\_"  
"He \_\_\_\_\_ away without looking back.

**Q8. Write 10 lines about your daily routine.**

**Do given projects according to your roll no.**

- Rollo 1 to 12 Prepare a project on the basis of Noun Gender.

<https://youtube.com/shorts/6ukzfmnJQq4?si=3g4UJ2mBMwTmMIC4>

- roll no 13 to 25 Prepare a project on the basis of Noun Number

[https://youtube.com/shorts/IS08KOa\\_FmE?si=5lznirDnq\\_tW7UeJ](https://youtube.com/shorts/IS08KOa_FmE?si=5lznirDnq_tW7UeJ)

roll no 26 to 35 Prepare a project on the basis of common nouns and proper nouns.

[https://youtu.be/W\\_C8yzM75CI?si=tr-VJmF6PLGStgOz](https://youtu.be/W_C8yzM75CI?si=tr-VJmF6PLGStgOz)



Multiple Choice Questions\*

Q1. Which organ helps us to breathe?\*

- a) Heart                      b) Brain                      c) Lungs                      d) Stomach

Q2. Which organ helps us digest food?\*

- a) Heart                      b) Brain                      c) Stomach                      d) Lungs

Q3. Which organ controls our whole body?

- a) Heart                      b) Brain                      c) Hands                      d) Legs

Q4. What is the main function of the heart?

a) To think                      b) To pump blood to all parts of the body

c) To digest food              d) To breathe

Q5. Which clothes keep us cool in summer?

a) Wollen clothes    b) Cotton clothes    c) Silk clothes    d) Leather jacket

Q6. What do we wear on our head while riding a bicycle?

a) Cap                      b) Helmet                      c) Hat                      d) Turban

Q7. How many players are there in a cricket team?

a) 9                      b) 10                      c) 11                      d) 12

Q8. Which game is played with a racket?\*

a) Football              b) Cricket                      c) Badminton              d) Kabaddi

Q9. What should we do before playing any sport?\*

a) Eat heavy food    b) Do warm-up exercise    c) Sleep    d) Watch TV

Q10. Which is a team sport?

a) Swimming              b) Running                      c) Football              d) Skating

- Draw a beautiful Mandala art using circles and patterns. Color it with your favorite bright colors.
- Prepare a collage of desserts of India.

**Do given projects according to your roll no.**

- roll no. 1 to 12. Prepare a project on Healthy and unhealthy food.  
<https://youtube.com/shorts/dZBHXgjmZEO?si=BSw43J5YsuY63Y2g>

- roll no. 13 to 25 Prepare a project on the basis of Indoor and outdoor games.

<https://youtu.be/u6Ut0RNVq6U?si=5fbG1TaaFy8x4Nmy>

<https://www.facebook.com/share/r/1CdHqRiHF4/>

- Rollno. 26 to 35 Prepare the project on the basis of internal and external organs of our body.

[https://youtube.com/shorts/\\_dyrqnNUfRw?si=FcmRvSjVkn8AJzzk](https://youtube.com/shorts/_dyrqnNUfRw?si=FcmRvSjVkn8AJzzk)

<https://www.facebook.com/share/r/1Api9T2yem/>



प्रश्न.1 निम्न चित्र को देखकर पांच पंक्तियां लिखिए।



1. \_\_\_\_\_

2. \_\_\_\_\_

3. \_\_\_\_\_

4. \_\_\_\_\_

5. \_\_\_\_\_

प्रश्न.2 दिए गए शब्दों की सहायता से कहानी में रिक्त स्थानों की पूर्ति कीजिए।

(लकड़हारा , नदी, ईमानदारी, दुखी, जल देवता, लकड़ी, ईनाम)

एक गाँव में एक गरीब \_\_\_\_\_ रहता था। वह रोज़ जंगल में \_\_\_\_\_ काटने जाता था। एक दिन उसकी कुल्हाड़ी हाथ से फिसलकर \_\_\_\_\_ में गिर गई। यह देखकर वह बहुत \_\_\_\_\_ हो गया। तभी \_\_\_\_\_ प्रकट हुए। उन्होंने सोने और चाँदी की कुल्हाड़ी दिखाई, पर लकड़हारे ने सच बताया। अंत में देवता उसकी असली कुल्हाड़ी लाए और उसे \_\_\_\_\_ भी दिया। शिक्षा : हमें हमेशा \_\_\_\_\_ और सच्चाई का साथ देना चाहिए।

प्रश्न .3 निम्नलिखित अपठित गद्यांश को पढ़कर प्रश्नों के उत्तर दीजिए।

सीमा को पेड़-पौधे बहुत पसंद थे। वह रोज अपने बगीचे में पौधों को पानी देती थी। उसके बगीचे में रंग-बिरंगे फूल खिले रहते थे। सुबह-सुबह तितलियाँ और चिड़ियाँ वहाँ आती थीं। सीमा अपने दोस्तों को भी पेड़ लगाने के लिए प्रेरित करती थी। सभी लोग उसके सुंदर बगीचे की तारीफ करते थे।

प्रश्न.1सीमा को क्या पसंद था?

उत्तर: \_\_\_\_\_

प्रश्न.2सीमा रोज क्या करती थी?

उत्तर:\_\_\_\_\_

प्रश्न.3बगीचे में कौन आते थे?

उत्तर:\_\_\_\_\_

प्रश्न.4सीमा अपने दोस्तों को किसके लिए प्रेरित करती थी?

उत्तर:\_\_\_\_\_

प्रश्न.5लोग किसकी तारीफ करते थे?

उत्तर: \_\_\_\_\_

प्रश्न.4 विलोम शब्द लिखिए ।

शब्द

विलोम शब्द

1.दिन -----

2.बड़ा -----

3.नया -----

4.सुख -----

5.ऊपर -----

प्रश्न.5 दो - दो पर्यायवाची शब्द लिखिए।

1.सूर्य - ----- , -----

2.जल - ----- , -----

3.पृथ्वी - ----- , -----

4.चंद्रमा - ----- , -----

5.हवा - ----- , -----

प्रश्न.6 अपनी गर्मी की छुट्टियाँ आप कैसे बिता रहे हैं? इसके बारे में **10 -15**

पंक्तियाँ रफ नोटबुक में लिखिए।

प्रश्न.7 दिए गए प्रोजेक्ट अनुक्रमांक के अनुसार कीजिए।

विलोम शब्द -अनुक्रमांक 1 से 10

[https://youtube.com/shorts/YIHJn2JgDvQ?si=CtVdhhRDp\\_rJoNFH](https://youtube.com/shorts/YIHJn2JgDvQ?si=CtVdhhRDp_rJoNFH)

<https://youtube.com/shorts/RZKrqjEl6uQ?si=V7QT5-GTEXYLSxSL>

पर्यायवाची शब्द -अनुक्रमांक 11 से 20

<https://youtube.com/shorts/p6dvA6Nlebs?si=6UqyLMB5VX0FhHoD>

<https://youtube.com/shorts/-sRcAHP8TM4?si=qrqZrioXVgbDE4t2>

संज्ञा -अनुक्रमांक 20 से 30

<https://youtube.com/shorts/E680EiXecZY?si=IC6hsOAOhWl9docz>

<https://www.facebook.com/share/r/1Co7horDEf/>

भाषा और लिपि - अनुक्रमांक 31 से 37

<https://youtube.com/shorts/cW4aHzyqkWI?si=g164CgeNdvUS7C>

2H



**Q1.(A) Write the number names:**

a) 6029 = \_\_\_\_\_

b) 7801 = \_\_\_\_\_

B) Write the following number names in figures.

a) Four hundred twenty-three = \_\_\_\_\_

b) Seven hundred eight = \_\_\_\_\_

**Q2.A) Arrange the numbers in Ascending order:**

3845, 1289, 5697, 7210

Ans. \_\_\_\_\_

B) Arrange the numbers in Descending Order:

8776, 4632, 9999, 6548

Ans. \_\_\_\_\_

**Q3. Add the following numbers:**

a)  $3845 + 2931 =$  \_\_\_\_\_

b)  $5675 + 1242 =$  \_\_\_\_\_

**Q4. Word Problems:**

A) Riya has 45 candies. Her mother gave her 23 more. How many candies does she have now?

Ans. \_\_\_\_\_

B) There are 29 boys and 31 girls in a class. How many students are there in the class altogether?

Ans. \_\_\_\_\_

**Q5. Write the Successor for the Following Numbers:**

Numbers

Successor

- a) 2456 → \_\_\_\_\_  
b) 3899 → \_\_\_\_\_  
c) 9999 → \_\_\_\_\_  
d) 6789 → \_\_\_\_\_

**Q6. Write the Predecessor for the Following Numbers:**

Predecessor	Numbers
a) _____	2449
b) _____	4579
c) _____	3689
d) _____	8999

**Q7. Mental Maths:**

- a) Half of 20 = \_\_\_\_\_  
b) Double of 15 = \_\_\_\_\_  
c)  $100 - 45 =$  \_\_\_\_\_  
d)  $50 + 25 =$  \_\_\_\_\_

**Q8. Tables Practice:**

A. Write tables from 2 to 12 neatly in your rough notebook five times and learn them also.

Q9. Do pages 29, 30, 36, 37, 49, and 50 in the Maths book.

Q10. Project Work:

Roll no 1 to 10 prepare a project on Roman Numerals.

<https://youtube.com/shorts/YFLmkDxeGDM?si=4dQ3p0zPFpNBe-hm>

Roll no 11 to 20 prepare a project on the Addition Wheel.

[https://youtube.com/shorts/tAUDG3gq0\\_E?si=uiLBbV5XMM8UPxhy](https://youtube.com/shorts/tAUDG3gq0_E?si=uiLBbV5XMM8UPxhy)

Roll no 21 to 30 prepare a project on Abacus.

[https://youtube.com/shorts/\\_V-qwtLPNa0?feature=shared](https://youtube.com/shorts/_V-qwtLPNa0?feature=shared)

[https://youtube.com/shorts/O\\_89rI4FVKs?si=yfn-NbJLOYzqDjwU](https://youtube.com/shorts/O_89rI4FVKs?si=yfn-NbJLOYzqDjwU)

Roll no 31 to 37 prepare a project on

Ascending and Descending order.

<https://youtube.com/shorts/eul-vyezyZ4?si=udaC8v31quL2NRog>



- Open MS Paint and draw 3 fishes of different sizes using Oval and Triangle tool. Add water waves using Curve tool. Fill colour in all shapes. Save the file and send it on this Email-id. [lshwarmarana@gmail.com](mailto:lshwarmarana@gmail.com)



Have a great



VaCation!

